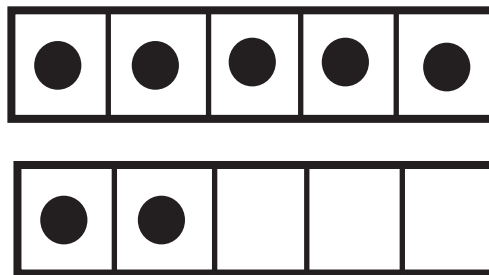


8-Which shows a way to make 8




www.BeautyAndBrainsGirls.com By Blake

8-Which shows a way to make 8



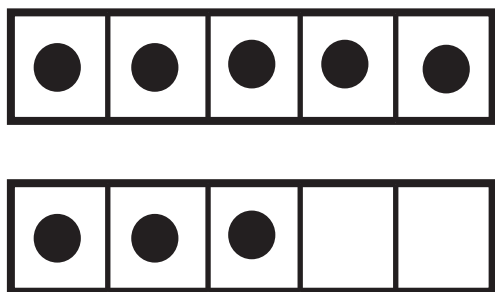
www.BeautyAndBrainsGirls.com By Blake

8-Which shows a way to make 8



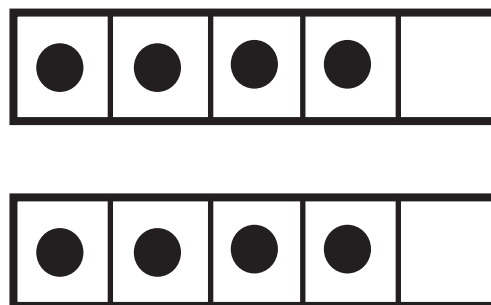
www.BeautyAndBrainsGirls.com By Blake

8-Which shows a way to make 8



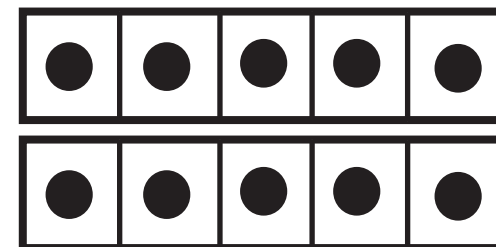
www.BeautyAndBrainsGirls.com By Blake

8-Which shows a way to make 8



www.BeautyAndBrainsGirls.com By Blake

8-Which shows a way to make 8



www.BeautyAndBrainsGirls.com By Blake

9--Which 2 cards display a total of 10

5



www.BeautyAndBrainsGirls.com By Blake

9--Which 2 cards display a total of 10

5

www.BeautyAndBrainsGirls.com By Blake

9--Which 2 cards display a total of 10

6



www.BeautyAndBrainsGirls.com By Blake

9--Which 2 cards display a total of 10

4

www.BeautyAndBrainsGirls.com By Blake

9--Which 2 cards display a total of 10

7



www.BeautyAndBrainsGirls.com By Blake


9--Which 2 cards display a total of 10

1


www.BeautyAndBrainsGirls.com By Blake

7-Number partners for the numeral 7


Locate and record



7-Number partners for the numeral 7



7-Number partners for the numeral 7



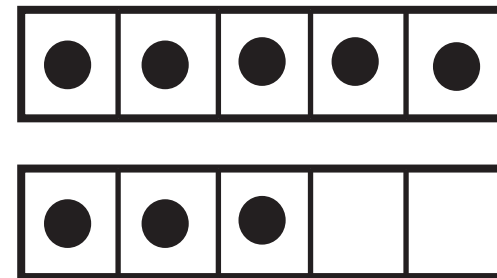
7-Number partners for the numeral 7



7-Number partners for the numeral 7

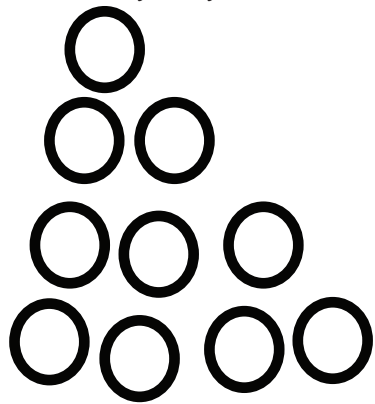


7-Number partners for the numeral 7



How many do you see? How do you see it?

Decomposing a group



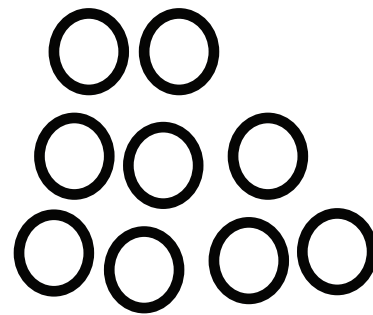
1 _____ 4 _____

2 _____ 5 _____

3 _____ 6 _____

www.BeautyAndBrainsGirls.com By Blake

How many do you see? How do you see it?




1 _____ 4 _____

2 _____ 5 _____

3 _____ 6 _____

www.BeautyAndBrainsGirls.com By Blake

How many do you see? How do you see it?




1 _____ 4 _____

2 _____ 5 _____

3 _____ 6 _____

www.BeautyAndBrainsGirls.com By Blake

How many do you see? How do you see it?



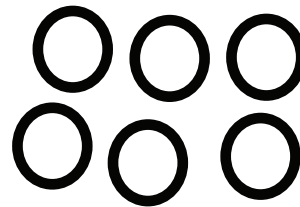
1 _____ 4 _____

2 _____ 5 _____

3 _____ 6 _____

www.BeautyAndBrainsGirls.com By Blake

How many do you see? How do you see it?




1 _____ 4 _____

2 _____ 5 _____

3 _____ 6 _____

www.BeautyAndBrainsGirls.com By Blake

How many do you see? How do you see it?



1 _____ 4 _____

2 _____ 5 _____

3 _____ 6 _____

www.BeautyAndBrainsGirls.com By Blake

7-Number partners for the numeral 6

5



www.BeautyAndBrainsGirls.com By Blake

7-Number partners for the numeral 6

1

4



www.BeautyAndBrainsGirls.com By Blake

7-Number partners for the numeral 6

2

7-Number partners for the numeral 6

3

7-Number partners for the numeral 6

3



www.BeautyAndBrainsGirls.com By Blake

www.BeautyAndBrainsGirls.com By Blake

www.BeautyAndBrainsGirls.com By Blake

What numbers add up to make 5?

- 3+2
- 7+2
- 5+0
- 0+5
- 2+3
- 4+1
- 3+2
- 9+2
- 3+2
- 1+2
- 5+0
- 1+4
- 2+3
- 0+2
- 8+2
- 3+2

What numbers add up to make 10?

- 1+9
- 7+2
- 6+4
- 8+2
- 3+2
- 4+6
- 2+3
- 10+0
- 9+2
- 0+10
- 7+3
- 1+2
- 5+0
- 5+5
- 9+1
- 2+8
- 0+2
- 8+2
- 3+7

What numbers add up to make 6?

- 1+5
- 6+4
- 3+3
- 0+6
- 4+2
- 0+5
- 4+1
- 3+4
- 4+2
- 1+6
- 9+2
- 2+4
- 3+3
- 2+4
- 5+1
- 6+9
- 1+5
- 4+2
- 8+2
- 3+2

What numbers add up to make 9?

- 2+2
- 7+2
- 6+3
- 3+6
- 3+2
- 1+8
- 1+7
- 3+2
- 8+1
- 9+2
- 2+7
- 4+5
- 4+5
- 8+1
- 0+2
- 0+9
- 5+4
- 0+2
- 6+3
- 3+2


What numbers add up to make 8?

- 1+7
- 7+2
- 0+8
- 0+5
- 2+6
- 8+0
- 4+4
- 7+1
- 3+5
- 2+7
- 4+5
- 6+2
- 5+3
- 3+5
- 5+3
- 2+6

What numbers add up to make 7?

- 3+2
- 7+2
- 5+2
- 0+7
- 6+1
- 2+5
- 3+4
- 7+0
- 8+2
- 1+2
- 1+6
- 3+4
- 1+2
- 5+0
- 9+2
- 0+7
- 4+3
- 3+4
- 0+2
- 8+2
- 3+2

6-Add within 10



www.BeautyAndBrainsGirls.com By Blake

6-Add within 10




www.BeautyAndBrainsGirls.com By Blake

6-Add within 10



www.BeautyAndBrainsGirls.com By Blake

6-Add within 10



www.BeautyAndBrainsGirls.com By Blake

6-Add within 10



www.BeautyAndBrainsGirls.com By Blake


6-Add within 10



www.BeautyAndBrainsGirls.com By Blake

How many do you see? How do you see it?

Doubles-Record
A group



1 _____ 4 _____


2 _____ 5 _____

3 _____ 6 _____

www.BeautyAndBrainsGirls.com By Blake

How many do you see? How do you see it?

Doubles-Record



1 _____ 4 _____


2 _____ 5 _____

3 _____ 6 _____

www.BeautyAndBrainsGirls.com By Blake

How many do you see? How do you see it?

Doubles-Record



1 _____ 4 _____


2 _____ 5 _____

3 _____ 6 _____

www.BeautyAndBrainsGirls.com By Blake

How many do you see? How do you see it?

Doubles-Record



1 _____ 4 _____


2 _____ 5 _____

3 _____ 6 _____

www.BeautyAndBrainsGirls.com By Blake

How many do you see? How do you see it?

Doubles-Record



1 _____ 4 _____


2 _____ 5 _____

3 _____ 6 _____

www.BeautyAndBrainsGirls.com By Blake

How many do you see? How do you see it?

Doubles-Record



1 _____ 4 _____


2 _____ 5 _____

3 _____ 6 _____

www.BeautyAndBrainsGirls.com By Blake

How many do you see? How do you see it?

Doubles-Record



1 _____ 4 _____


2 _____ 5 _____

3 _____ 6 _____

www.BeautyAndBrainsGirls.com By Blake

How many do you see? How do you see it?

Doubles-Record



1 _____ 4 _____

2 _____ 5 _____

3 _____ 6 _____

www.BeautyAndBrainsGirls.com By Blake

What numbers add up to make 8

Doubles-Record

- 4+4
- 7+0
- 4+4
- 2+3
- 0+5
- 4+4
- 0+2
- 9+2
- 3+2
- 1+2
- 4+4
- 1+4
- 4+4
- 0+2
- 0+3
- 3+2

www.BeautyAndBrainsGirls.com

What numbers add up to make 10

Doubles-Record

- 1+9
- 7+2
- 6+1
- 5+5
- 5+5
- 5+5
- 2+3
- 5+5
- 9+2
- 0+10
- 7+0
- 1+2
- 5+5
- 5+5
- 9+1
- 2+8
- 5+5
- 0+2
- 5+5

www.BeautyAndBrainsGirls.com

What numbers add up to make 12

Doubles-Record

- 6+6
- 7+2
- 3+2
- 6+6
- 0+5
- 6+6
- 3+4
- 3+2
- 1+6
- 9+2
- 2+4
- 6+6
- 6+6
- 9+2
- 4+5
- 5+2
- 0+2
- 8+2
- 3+2

www.BeautyAndBrainsGirls.com

What numbers add up to make 14 ?

Doubles-Record

- 7+7
- 6+3
- 7+2
- 3+2
- 3+6
- 7+7
- 0+2
- 7+7
- 9+2
- 0+2
- 7+7
- 4+5
- 5+4
- 7+7
- 0+2
- 7+7
- 9+2
- 7+7
- 7+7
- 8+2
- 7+7

www.BeautyAndBrainsGirls.com

What numbers add up to make 16 ?

Doubles-Record

- 1+7
- 8+8
- 7+2
- 2+6
- 8+8
- 0+8
- 4+4
- 9+2
- 3+5
- 8+8
- 8+8
- 8+8
- 5+3
- 0+2
- 8+2
- 3+2

www.BeautyAndBrainsGirls.com

What numbers add up to make 18 ?

- 3+2
- 5+2
- 7+2
- 9+9
- 0+7
- 5+5
- 2+5
- 3+2
- 9+9
- 8+2
- 9+9
- 3+4
- 9+9
- 9+9
- 3+4
- 3+4
- 0+2
- 4+3
- 9+2
- 0+2
- 8+2
- 9+9

www.BeautyAndBrainsGirls.com

What numbers add up to make 6

Doubles-Record

- 3+3
- 7+2
- 5+0
- 1+5
- 3+3
- 0+5
- 4+2
- 4+1
- 3+2
- 9+2
- 2+4
- 3+3
- 1+2
- 5+1
- 2+4
- 3+3
- 6+0
- 1+4
- 2+3
- 0+2
- 8+2
- 3+3

What numbers add up to make 4

Doubles-Record

- 3+2
- 5+0
- 1+0
- 1+3
- 9+4
- 2+2
- 2+2
- 9+2
- 2+2
- 3+3
- 4+0
- 1+4
- 2+3
- 2+2
- 8+2
- 3+2

What numbers add up to make 0 ?

Doubles-Record

- 2+2
- 6+3
- 7+2
- 3+2
- 0+0
- 0+0
- 0+2
- 0+2
- 0+0
- 9+2
- 2+7
- 4+5
- 0+0
- 0+5
- 0+2
- 0+0
- 9+2
- 0+2
- 0+2
- 0+2
- 8+2
- 3+2

What numbers add up to make 2 ?

Doubles-Record

- 1+1
- 6+3
- 7+2
- 3+2
- 3+6
- 1+8
- 0+2
- 0+2
- 1+1
- 1+1
- 2+7
- 4+5
- 0+2
- 5+4
- 0+5
- 1+1
- 1+1
- 0+2
- 9+2
- 1+1
- 8+2
- 3+2