


Add Within 10

10




Prepared By Ms. Blake

www.BeautyAndBrainsGirls.com

Add Within 10

8




Prepared By Ms. Blake

www.BeautyAndBrainsGirls.com

Add Within 10

9



Prepared By Ms. Blake

www.BeautyAndBrainsGirls.com

$$5+5$$

Prepared By Ms. Blake

$$5+3$$

Prepared By Ms. Blake

$$7+2$$

Prepared By Ms. Blake

$$7+3$$

Prepared By Ms. Blake

$$6+2$$

Prepared By Ms. Blake

$$8+1$$

Prepared By Ms. Blake

$$8+2$$

Prepared By Ms. Blake

$$7+1$$

Prepared By Ms. Blake

$$5+4$$

Prepared By Ms. Blake

$$10+0$$

Prepared By Ms. Blake

$$8+0$$

Prepared By Ms. Blake

$$6+3$$

Prepared By Ms. Blake



Prepared by Ms. Blake

PROBLEM SOLVING

Could you have used a different strategy to solve this equation?

What decision do you think _____ should make to get the right answer?

Two large empty boxes for student work. The left box is labeled "Add Within 10" and the right box is labeled "Add Within 10". Both boxes have a small heart icon next to them.

A grid of nine small boxes, each containing an addition problem and the text "Prepared by Ms. Blake".

5+5	5+3	7+2
7+3	6+2	8+1
8+2	7+1	5+4
10+0	8+0	6+3

Use on:

More questions in the back

Prepared by Ms. Blake

Can someone restate _____'s explanation? Do you recognize any of the strategies that _____ used?

What strategy or tool can you use to solve this problem?

What are some possible answers for this problem?

What techniques have you tried that did not work?

How does knowing your doubles help you solve this problem? (or make a 5, 10, decomposing 11-19 etc.)

Can someone retell _____'s explanation? Do you recognize any of the strategies that _____ used?