


Add Within 5

6




Prepared By Ms. Blake

www.BeautyAndBrainsGirls.com

Add Within 5

7



Prepared By Ms. Blake

www.BeautyAndBrainsGirls.com

Add Within 5

2



Prepared By Ms. Blake

www.BeautyAndBrainsGirls.com

$6+0$

Prepared By Ms. Blake

$7+0$

Prepared By Ms. Blake

$2+5$

Prepared By Ms. Blake

$2+0$

Prepared By Ms. Blake

$5+1$

Prepared By Ms. Blake

$6+1$

Prepared By Ms. Blake

$1+6$

Prepared By Ms. Blake

$1+2$

Prepared By Ms. Blake

$4+2$

Prepared By Ms. Blake

$5+2$

Prepared By Ms. Blake

$1+5$

Prepared By Ms. Blake

$0+2$

Prepared By Ms. Blake

$3+3$

Prepared By Ms. Blake

$4+3$

Prepared By Ms. Blake

$0+6$

Prepared By Ms. Blake

$1+1$

Prepared By Ms. Blake

$2+4$


Prepared By Ms. Blake

$3+4$

Prepared By Ms. Blake

Stickers

Quote

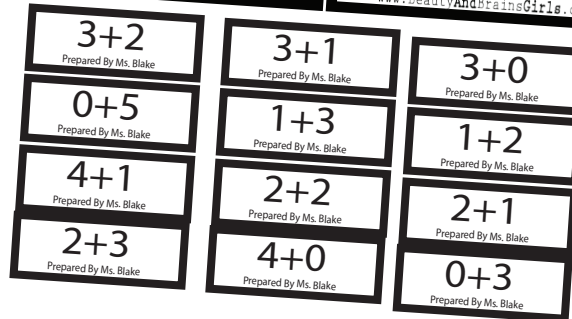
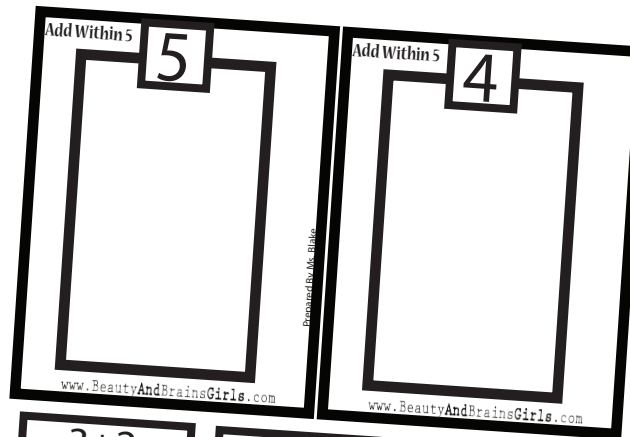


Prepared by Ms. Blake

PROBLEM SOLVING

Could you have used a different strategy to solve this equation?

What decision do you think _____ should make to get the right answer?



Use on:

More questions in the back

Prepared by Ms. Blake

Can someone restate _____'s explanation?
Do you recognize any of the strategies that _____ used?

What strategy or tool can you use to solve this problem?

What are some possible answers for this problem?

What techniques have you tried that did not work?

How does knowing your doubles help you solve this problem?
(or make a 5, 10, decomposing 11-19 etc.)

Can someone retell _____'s explanation?
Do you recognize any of the strategies that _____ used?