

MEASUREMENT

Big, Bigger, Biggest

Long, Longer, Longest

Tall, Taller, Tallest

Short, Shorter, Shortest

Light, Lighter, Lightest

Heavy, Heavier, Heaviest

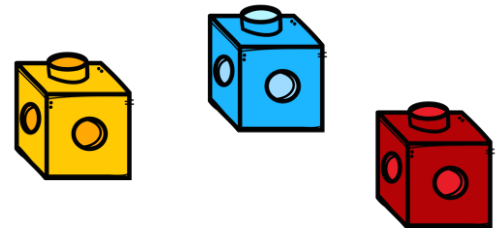
Holds More or Less?

Holds Most or Least?

Measure Using Objects

Measure Using Inch Ruler

Compare Size, Weight, and Capacity



By: Miss Howard

Thank You

for your purchase!

I sincerely hope that you find this product helpful and that your kids enjoy the activities. Please don't hesitate to contact me if you have any questions.

When you get a chance, please also don't forget to leave a feedback to let me know how it went. Again, thank you for your support!




cathoward14@gmail.com

Clip arts and Fonts by:

[Tim-Van-De-Vall](#)




Name: _____




Big and Small

Direction: Color the big sea creatures blue and small green.



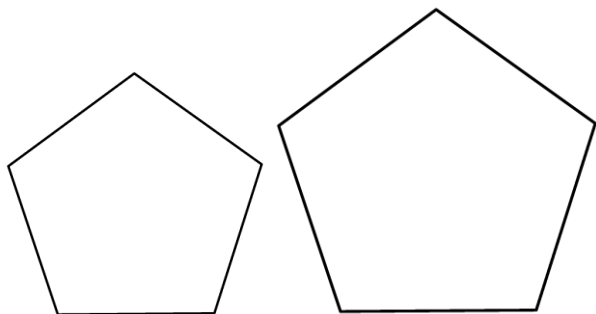
Name: _____

Bigger

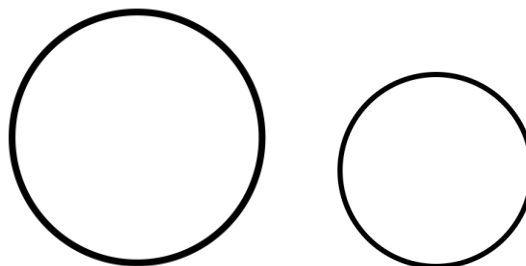


Direction: Color the correct answer in each set.

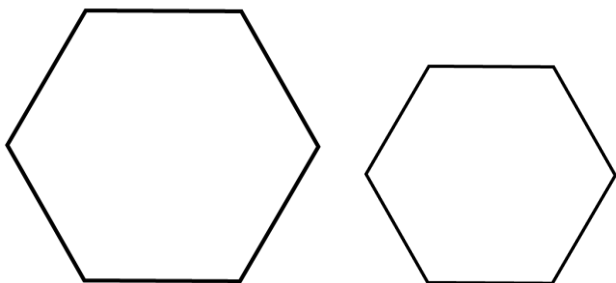
Which pentagon is bigger?



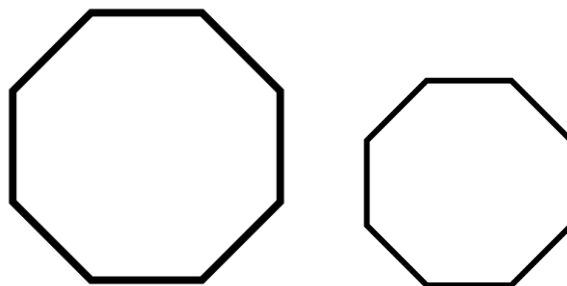
Which circle is bigger?



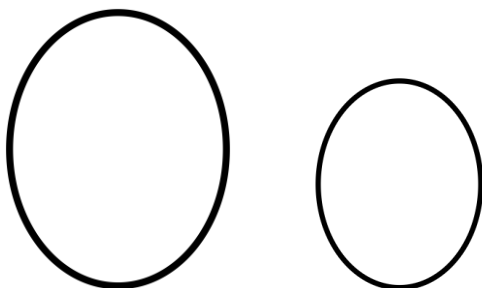
Which hexagon is bigger?




Which octagon is bigger?



Which oblong is bigger?



Which star is bigger?



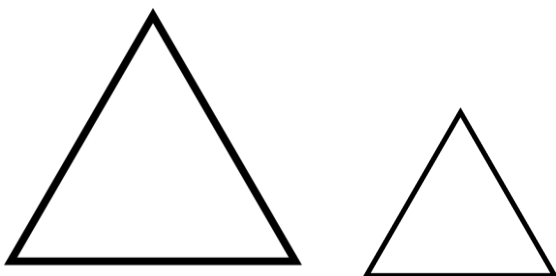
Name: _____

Smaller

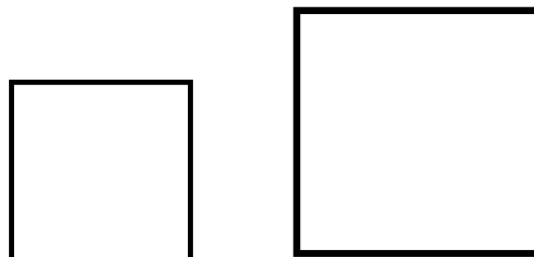


Direction: Color the correct answer in each set.


Which triangle is smaller?




Which square is smaller?



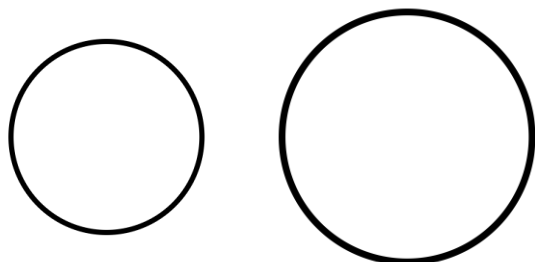
Which heart is smaller?



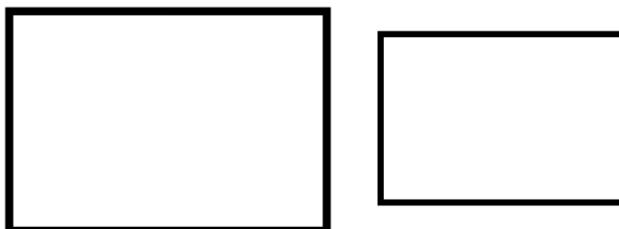
Which star is smaller?



Which circle is smaller?



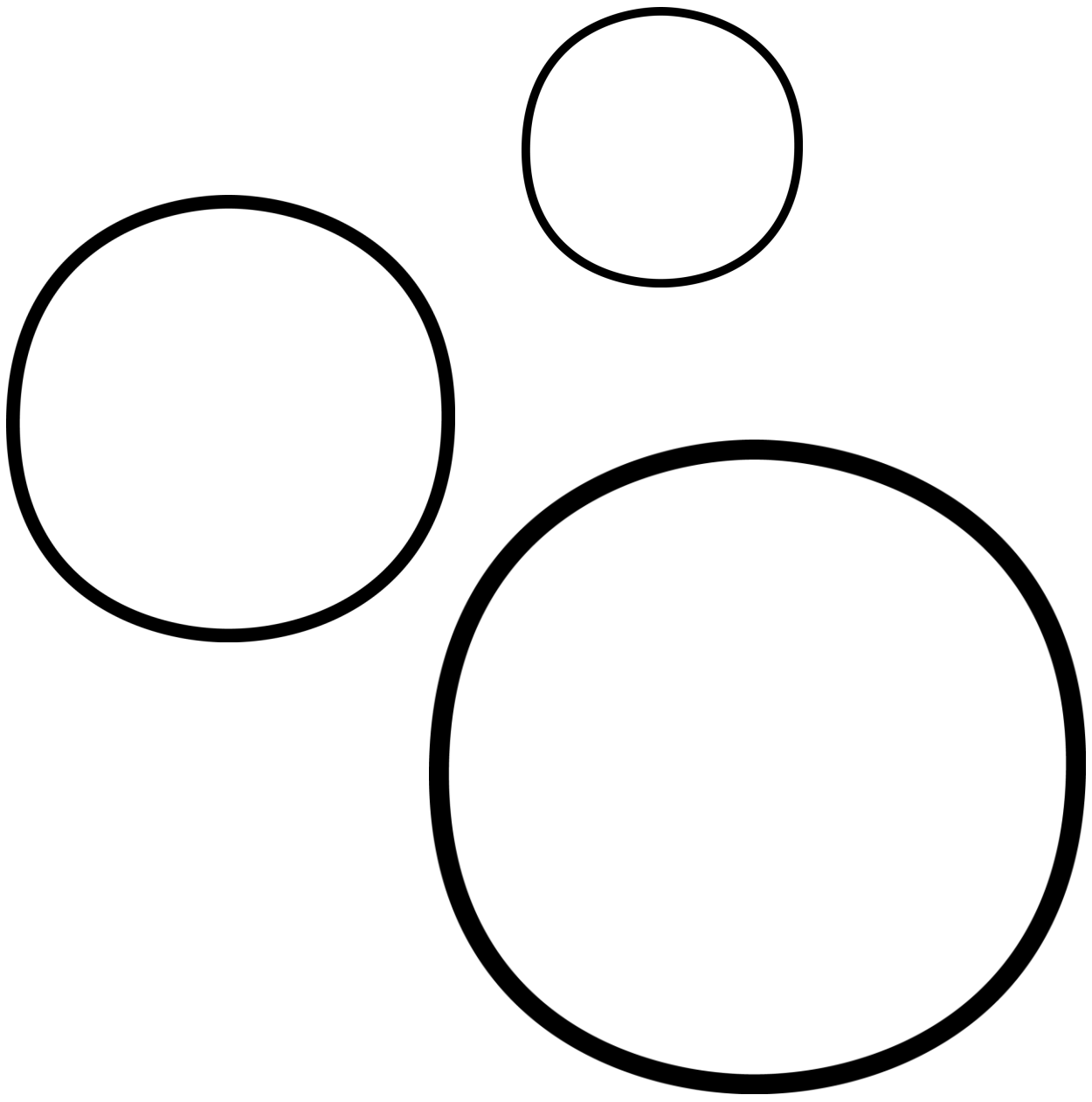

Which rectangle is smaller?



Name: _____

Biggest Bubble




Direction: Color the biggest bubble red and
the smallest blue.



Name: _____

Smallest Bubble




Direction: Color the smallest bubble brown
and the biggest orange.



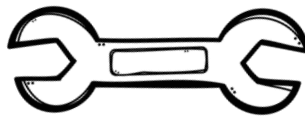
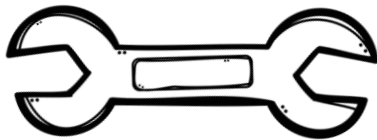
Name: _____

Direction: Color the correct answer in each row.


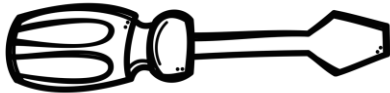
Which hammer is longer?



Which wrench is shorter?



Which screwdriver is longer?



Which saw is shorter?



Which board is shorter?

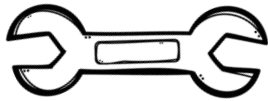


L
e
t
.
s
B
u
i
l
d
!


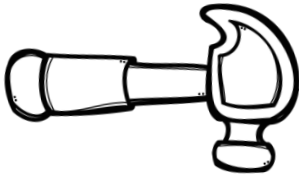
Name: _____



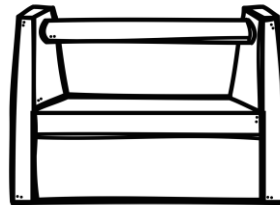
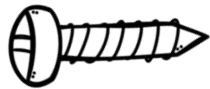
Direction: Underline the correct answer in each row.



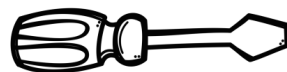
The wrench is (shorter/longer) than the board.



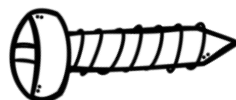

The hammer is (shorter/longer) than the nail.



The screw is (shorter/longer) than the toolbox.



The saw is (shorter/longer) than the screwdriver.



The toolbox is (shorter/longer) than the screw.

B

U

S

Y

D

A


Y

!


Name: _____





Direction: Underline the correct answer in each row.




The ship is (shorter/longer) than the boat.





The bus is (shorter/longer) than the motorcycle.



The ship is (shorter/longer) than the scooter.



The train is (shorter/longer) than the car.



The bike is (shorter/longer) than the helicopter.




T
r
a
n
s
p
o
r
t
a
t
i
o
n

Name: _____

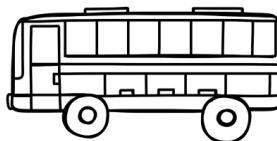


Let's Go Places!

Direction: Color the correct answer in each row.




Which ship is the longest?





Which bus is the shortest?






Which car is the longest?



Which train is the shortest?



Which helicopter is the shortest?



Name: _____

Directions: Cut and paste the picture under each label.



**T
O
O
L
S**

Short




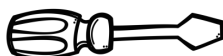
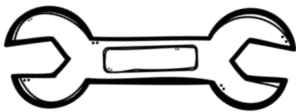
Shorter




Shortest



© 2015 Miss Howard



Name: _____



Directions: Cut and paste the picture under each label.

Long



Longer



Longest



B

R

O


O

O

M

M

© 2015 Miss Howard




Name: _____

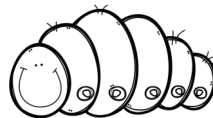



Bugs and Insects


Direction: Underline the correct answer in each set.




The bee is (shorter / longer) than the grasshopper.



The leaf bug is (shorter / longer) than the grub.



The snail is (shorter / longer) than the slug.



The grub is (shorter / longer) than the bee.

Name: _____

Sluggish

Directions: Cut and paste the picture under each label.

Long



Longer



Longest



© 2015 Miss Howard



Name: _____



Crawlers and Hopper

Directions: Cut and paste the picture under each label.

Long



Longer



Longest



© 2015 Miss Howard



Name: _____




Shortest

Direction: Circle the correct answer.



Which object is the shortest?



A



B



C

Which object is the shortest?



A



B



C

Which object is the shortest?



A



B



C

Name: _____



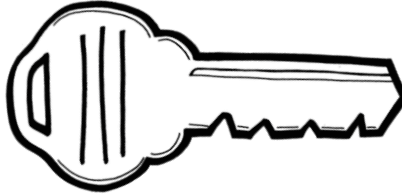
Longest

Direction: Circle the correct answer.

Which Key is the longest?



A



B



C

Which Key is the longest?



A

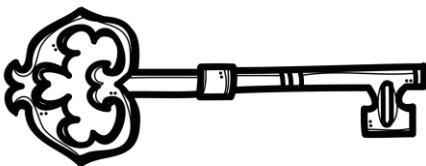


B

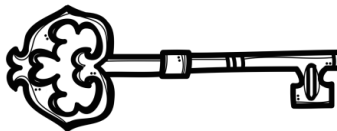


C

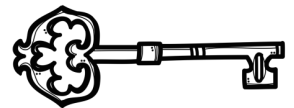
Which Key is the longest?



A



B




C

Name: _____


Taller and Shorter

Direction: Circle the correct answer in each set.

Which tree is taller?




Which school is shorter?



Which house is shorter?



Which traffic light is taller?




Name: _____

THE TALL THINGS!

Direction: Underline the correct answer in each set.



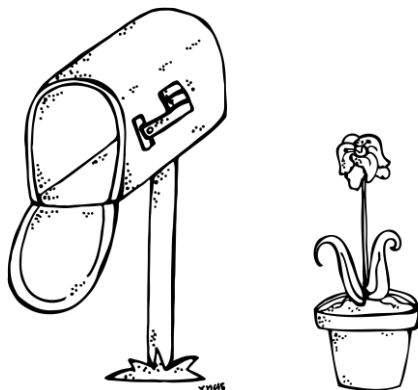
The school is (taller / shorter)
than the street light.




The bird house is (taller / shorter)
than the tree.



The mailbox is (taller / shorter)
than the plant.



The house is (taller / shorter)
than the dog.




Name: _____




Barn Animals

Direction: Circle the correct answer in each set.

Which pig is taller?




A




B

Which cat is shorter?




A




B

Which horse is shorter?




A




B

Which chicken is taller?



A




B

Name: _____

Growing Kids

Directions: Circle the correct answer in each set.

Which Kid is shorter?



A

B


Which Kid is taller?



A

B


Which Kid is taller?



A

B

Which Kid is shorter?



A

B

Name: _____

Things

Tall






Taller



Tallest



Direction: Arrange
the objects from tall
to tallest.



Name: _____

Kiddos

Tall




Taller



Tallest



Direction: Arrange
the objects from tall
to tallest.



Name: _____

Buildings

Tall





Taller



Tallest



Direction: Arrange
the objects from tall
to tallest.




Name: _____

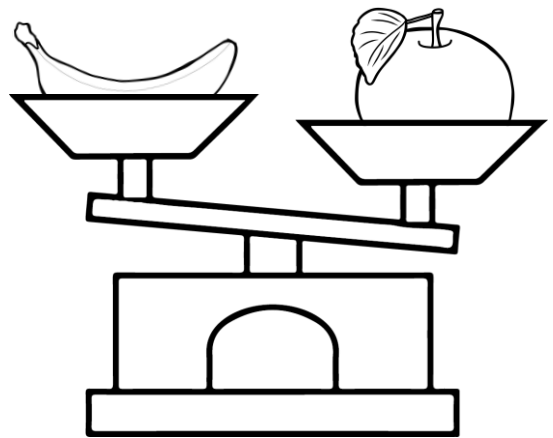
Weighing FRUITS

Direction: Color the correct answer in each set.


Which is lighter?




Which is heavier?



Which is heavier?



Which is lighter?




Name: _____


Weighing Veggies

Direction: Color the correct answer in each set.


Which is lighter?




Which is heavier?



Which is heavier?



Which is lighter?




Name: _____

FRUITS and Veggies


Direction: Write the correct answer in the blank.

The broccoli weighs _____
the apple.




less than the same as more than

The corn weighs _____
the beet.




less than the same as more than

The grapes weighs _____
the carrots.



less than the same as more than

The cabbage weighs _____
the tomato.



less than the same as more than


Name: _____

Fair Food

Direction: Write the correct answer in the blank.


The fries weighs _____
the cupcake.

less than the same as more than




The chips weighs _____
the hotdog.

less than the same as more than




The donut weighs _____
the soda pop.

less than the same as more than



The popcorn weighs _____
the hamburger.

less than the same as more than



Name: _____

Weighing Sweets

Direction: Color the correct answer in each set.

Which is heavier?



bag of candies



candy

Which is lighter?



cookie



bag of cookies

Which is lighter?




cookie



glass of milk

Which is heavier?



gumball machine



cupcake

Name: _____

Something Yummy!

Directions: Underline and color the correct answer in each set.



The candy is (heavier / lighter) than the cupcake.



The glass of milk is (heavier / lighter) than the cookie.



The gumball machine is (heavier / lighter) than the jar.



The cookie is (heavier / lighter) than the bag of candies.

Name: _____


Weighing Animals

Direction: Color the correct answer in each set.

Which is heavier?



parrot




hippo

Which is lighter?



tiger



frog

Which is lighter?




flamingo




bear

Which is heavier?



elephant




turtle

Name: _____




Farm Animals


Directions: Underline and color the correct answer in each set.





The duck is (heavier / lighter) than the cow.



The goat is (heavier / lighter) than the rooster.



The sheep is (heavier / lighter) than the chick.




The horse is (heavier / lighter) than the hen.

Name: _____

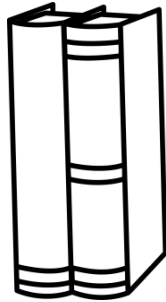
School Supplies

Direction: Color the correct answer in each set.

Which is lighter?



scissors

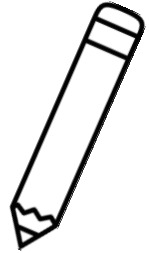


books

Which is lighter?




school bag




pencil

Which is heavier?

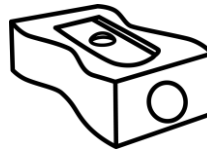


glue




paper clip

Which is heavier?



sharpener




eraser

Name: _____

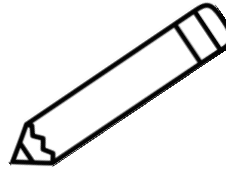


Max's School Supplies

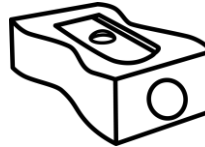

Direction: Underline the correct answer.



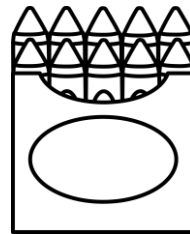
The scissors is (heavier/lighter) than the bag.



The books are (heavier/lighter) than the pencil.



The glue is (heavier/lighter) than the sharpener.




The clip is (heavier/lighter) than the box of crayon.

Name: _____

HEAVIEST!

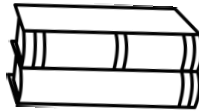
Direction: Color the correct answer.



Which is the heaviest?



bookcase

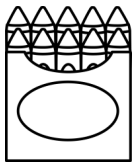


books



School bag

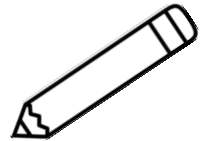
Which is the heaviest?



box of crayons




whiteboard

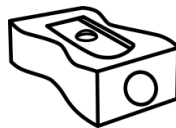


pencil


Which is the heaviest?



chair



sharpener




desk

Which is the heaviest?



eraser



clock



paper clip

Name: _____

LIGHTEST!

Direction: Color the correct answer.




Which is the lightest?



magnifying glass



feather



jar


Which is the lightest?



strawberry jam



pancakes

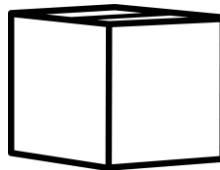


cherry

Which is the lightest?



sunglasses



box




paint

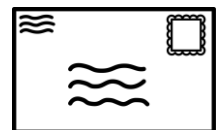
Which is the lightest?



fish bowl




beach ball



envelope

Name: _____

HOLDS MORE



Direction: Color the correct answer in each set of jars.


Which jar holds more?




Which jar holds more?




Which jar holds more?




Which jar holds more?



Which jar holds more?




Which jar holds more?



Name: _____

HOLDS LESS




Direction: Color the correct answer in each set of jars.


Which jar holds less?



Which jar holds less?




Which jar holds less?




Which jar holds less?



Which jar holds less?



Which jar holds less?





Name: _____



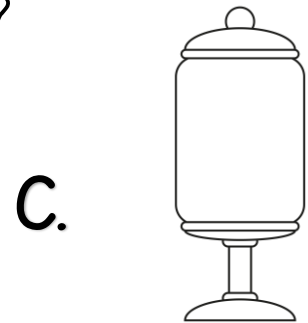
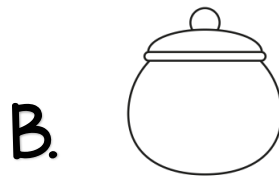

Hippo's Jars

Direction: Circle the letter of the correct answer in each row.

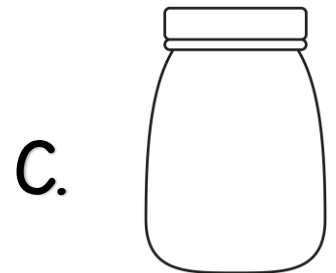

Which jar holds the least?




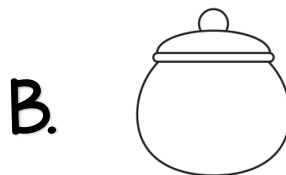
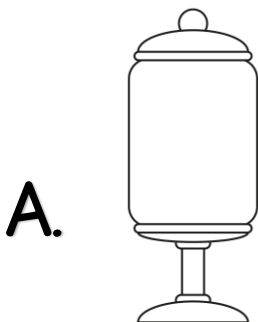
Which jar holds the most?



Which jar holds the most?



Which jar holds least?



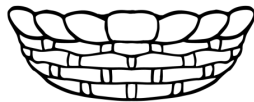


Name: _____



Picnic Baskets

Direction: Color the correct answer basket.


Which basket holds the most?



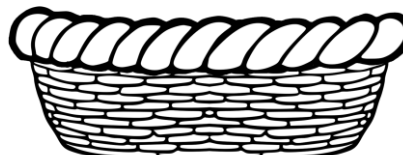
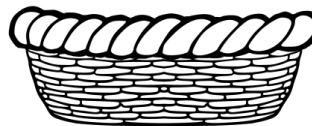
Which basket holds least?



Which basket holds the least?



Which basket holds the most?




Name: _____

Baskets for the Bunnies

Direction: Circle the correct answer in each set.

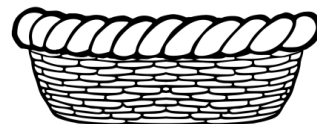
Which basket holds more?




A.



B.



Which basket holds less?




A.



B.




Which basket holds less?




A.



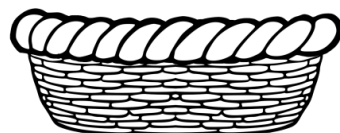
B.




Which basket holds more?



A.



B.



Name: _____

BANANAS



Direction: Measure the line using the bananas.

A.



The line is about _____ bananas long.

B.



The line is about _____ bananas long.

C.

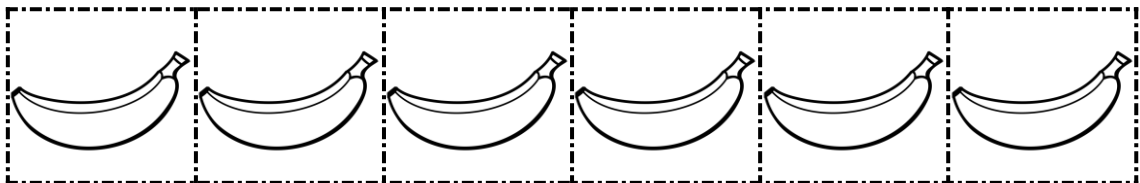


The line is about _____ bananas long.

D.



The line is about _____ bananas long.



Name: _____



Smile!

Direction: Measure the line using the cameras.

A.



The line is about _____ cameras long.

B.



The line is about _____ cameras long.

C.

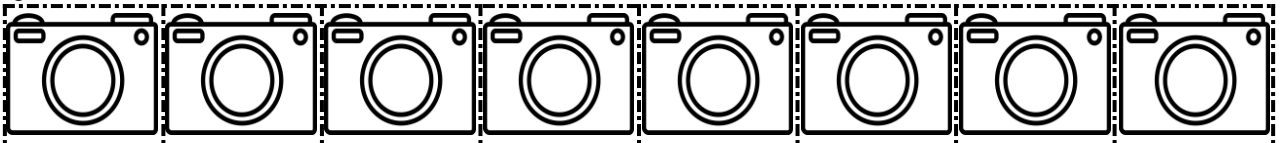


The line is about _____ cameras long.

D.



The line is about _____ cameras long.



Name: _____

DOMINOES



Direction: Measure the line using the dominoes.

A.



The line is about _____ dominoes long.

B.



The line is about _____ dominoes long.

C.

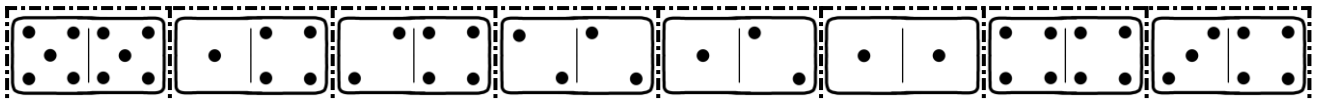


The line is about _____ dominoes long.

D.



The line is about _____ dominoes long.



Name: _____



PAPER CLIPS!

Direction: Measure the line using the paper clips.

A.



The line is about _____ paper clips long.

B.



The line is about _____ paper clips long.

C.



The line is about _____ paper clips long.

D.



The line is about _____ paper clips long.



Name: _____



BLOCKS!

Direction: Measure the line using the blocks.

A.



The line is about _____ blocks long.

B.



The line is about _____ blocks long.

C.

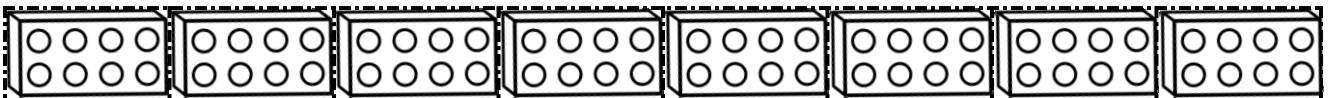


The line is about _____ blocks long.

D.



The line is about _____ blocks long.



Name: _____

Let's Measure!



Directions: Cut out the ruler and measure the lines.
Write your answer in the blank.

A.



The line is about _____ inches long.

B.



The line is about _____ inches long.

C.



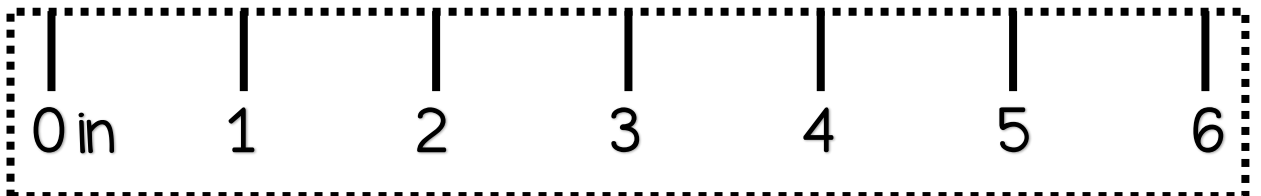
The line is about _____ inches long.

D.



The line is about _____ inches long.

© 2015 Miss Howard




Name: _____

Alligator


Directions: Cut out the ruler and measure the alligators.
Write your answer in the blank.

A.




The alligator is about _____ inches long.

B.



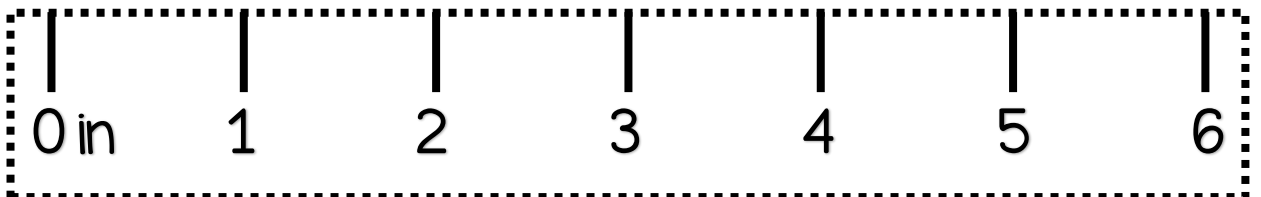
The alligator is about _____ inches long.

C.



The alligator is about _____ inches long.

© 2015 Miss Howard



Name: _____

Crayons

Directions: Cut out the ruler and measure the crayons. Write your answer in the blank.



A.



The crayon is about _____ inches long.

B.



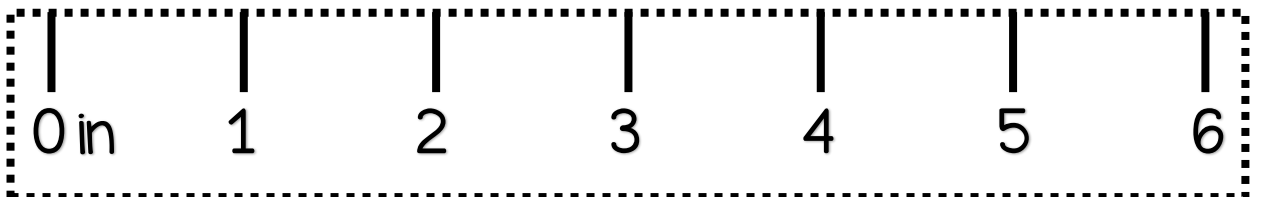
The crayon is about _____ inches long.

C.



The crayon is about _____ inches long.

© 2015 Miss Howard




Name: _____

Twigs and Log

Directions: Cut out the ruler and measure the objects. Write your answer in the blank.

A.



The twig is about _____ inches long.

B.



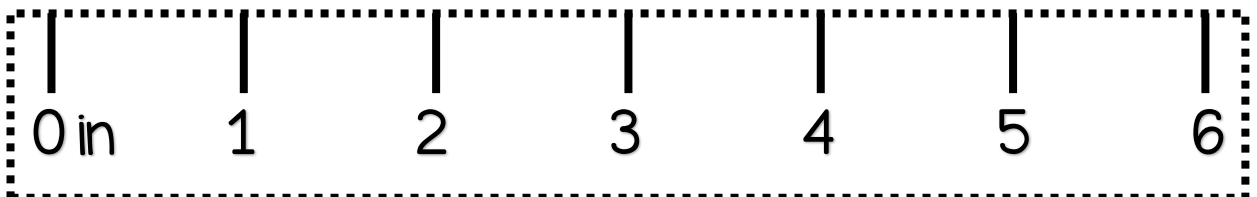
The log is about _____ inches long.

C.



The twig is about _____ inches long.

© 2015 Miss Howard



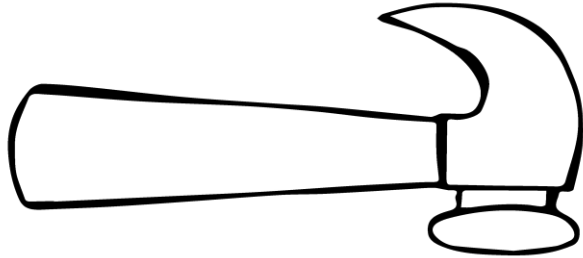
Name: _____

Hammer and Nails

Directions: Cut out the ruler and measure the objects.

Write your answer in the blank.

A.



The hammer is about _____ inches long.

B.



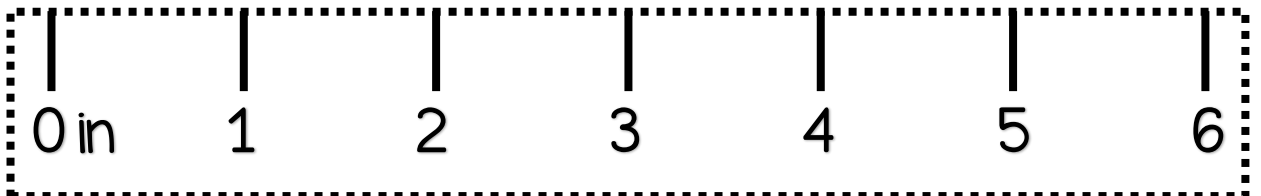
The nail is about _____ inches long.

C.



The nail is about _____ inches long.

© 2015 Miss Howard




Name: _____


Farm Animals

Directions: Cut out the ruler and measure the animals.
Answer the questions below.

horse




cow



The horse is about _____ inches long.

The cow is about _____ inches long.

© 2015 Miss Howard




Name: _____


In the Classroom

Directions: Cut out the ruler and measure the objects.
Answer the questions below.

whiteboard




bookcase



The whiteboard is about _____ inches long.

The bookcase is about _____ inches long.

© 2015 Miss Howard

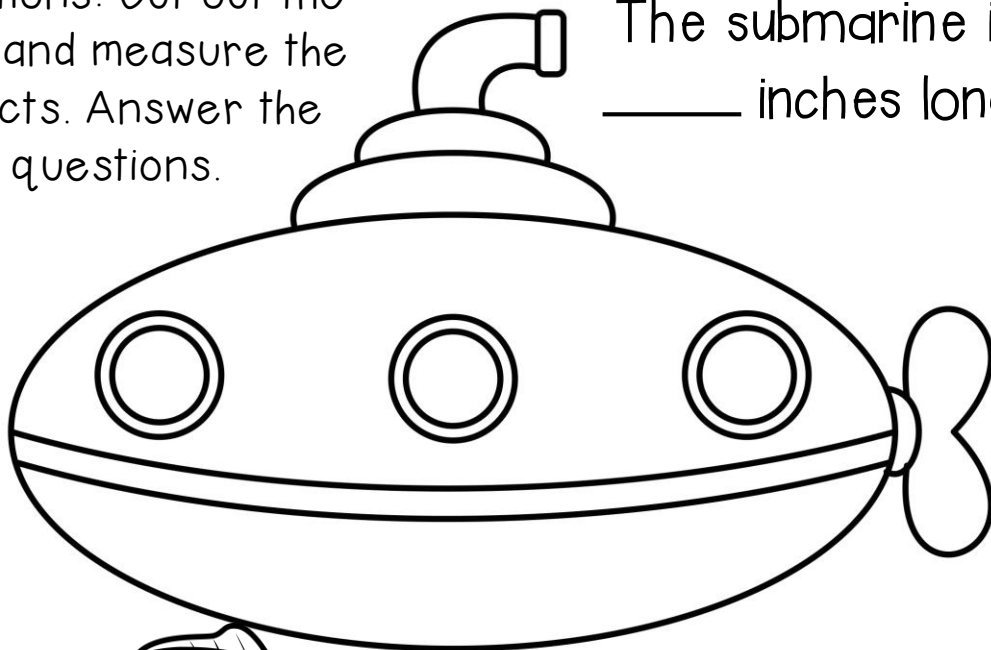


Name: _____


Under the Sea

Directions: Cut out the ruler and measure the objects. Answer the questions.

The submarine is about _____ inches long.




The fish is about _____ inches long.



The shell is about _____ inches long.



© 2015 Miss Howard



Terms of Use

Copyright © 2015 Miss Howard
All Rights Reserved.

Purchase of this item entitles the purchaser the right to reproduce and distribute the product for personal or single-classroom use only.

No part of this product may be reproduced, distributed, or transmitted in any form or by any means for the purpose of making profit.

It is forbidden to place the entire product or any part of it on the internet to include blogs, personal and classroom websites without a written consent from the author.

Thank you for
your support!

