

Name _____

Addition Patterns

Skill 9

Learn the Math


Add 1. Look for a pattern.

Vocabulary


pattern



$$1 + 1 = \underline{2}$$



$$2 + 1 = \underline{3}$$



$$3 + 1 = \underline{4}$$

Add 2. Look for a pattern.



$$1 + 2 = \underline{3}$$





$$2 + 2 = \underline{\quad}$$





$$3 + 2 = \underline{\quad}$$

Count how many. Draw one more.
Write how many in all.

1.  $3 + 1 = \underline{4}$

2.  $4 + 1 = \underline{\quad}$

3.  $5 + 1 = \underline{\quad}$

4.  $6 + 1 = \underline{\quad}$

Add 2. Complete each addition sentence.

5. $1 + \underline{2} = \underline{\quad}$

6. $2 + \underline{\quad} = \underline{\quad}$

7. $3 + \underline{\quad} = \underline{\quad}$

8. $4 + \underline{\quad} = \underline{\quad}$

9. $5 + \underline{\quad} = \underline{\quad}$

10. $6 + \underline{\quad} = \underline{\quad}$